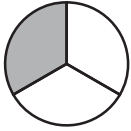


1. What part of the circle is shaded?



- (A) 3 out of 3 parts
(B) 2 out of 3 parts
(C) 1 out of 3 parts
(D) 1 out of 4 parts
3. Katrina used 29 apples to make applesauce. She has 14 apples left.

How many apples did Katrina have to begin with?

Which number sentence can you use to help solve the problem?




- (A) $43 + 14 = 57$
(B) $29 + 14 = 43$
(C) $29 - 15 = 14$
(D) $29 - 14 = 15$

2. Which is the missing number?

$$67 + \underline{\quad} = 100$$

- (A) 47
(B) 43
(C) 37
(D) 33
4. Which solid figure can you trace to make the plane shape shown below?



- (A) 
- (B) 
- (C) 
- (D) 