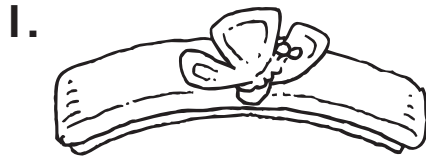


Centimeters

Estimate the length of each object.
Then use a ruler to measure.



Estimate: about _____ cm

Measure: about _____ cm



Estimate: about _____ cm

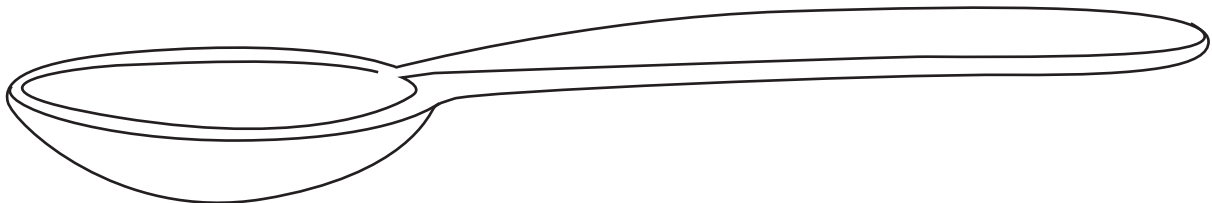
Measure: about _____ cm



Estimate: about _____ cm

Measure: about _____ cm

4. Look at the spoon. Measure the length of the spoon in centimeters. About how long is the spoon?





- (A) about 10 centimeters (C) about 16 centimeters
(B) about 13 centimeters (D) about 18 centimeters

5. **Spatial Thinking** Choose the object that is about 1 centimeter long.



(C)



(D)

