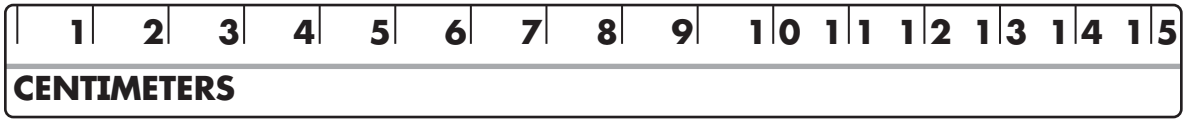



Name _____

About how long is each object?




- (A) about 1 centimeter (C) about 3 centimeters
(B) about 2 centimeters (D) about 4 centimeters



- (A) about 5 centimeters (C) about 3 centimeters
(B) about 4 centimeters (D) about 2 centimeters

3. **Writing in Math** Measure the pen to the nearest centimeter.



The pen is about _____ centimeters.

Tell how you measure to the nearest centimeter.
