




Name _____

Inches, Feet, and Yards

Circle the object that is about each length.

1. a foot



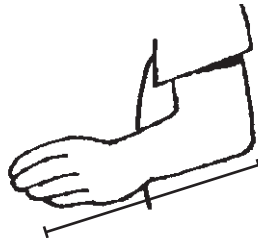
2. a yard



3. an inch



4. Measure from your fingertips to your elbow.



Estimate

Measure

Standard Units

about _____
paper clips

about _____
paper clips

about _____
inches


5. Sandy measures the length of a hockey stick. She says it is 4 units long. What unit did she use?



- (A) cubes
- (B) inches
- (C) feet
- (D) yards

6. Reasonableness

What is the height of the water bottle?



- (A) 9 cubes
- (B) 9 inches
- (C) 9 feet
- (D) 9 yards