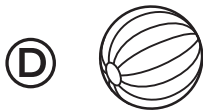


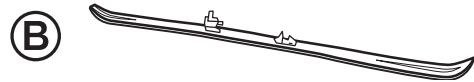
Name _____

Choose the best answer.

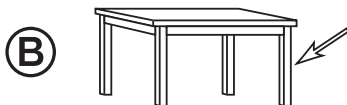
1. Which is about an inch in length?



2. Which is about a foot in length?



3. Which is about a yard in length?



4. Draw a picture with 3 objects. Include an object about one inch long, another object about one foot long, and another object about one yard long. Label your drawings **inch**, **foot**, and **yard**.