

Name _____

Inches, Feet, and Yards

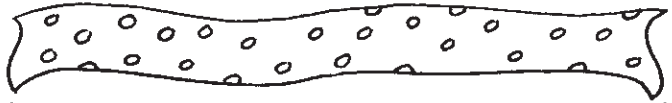
This rope is about 1 inch long.


about 1 inch

This ribbon is about 1 foot long.
There are 12 inches in 1 foot.



about 1 foot


This scarf is about 1 yard long.
There are 3 feet in 1 yard.



about 1 yard

About how long is each object? Circle the answer.


1.  about 1 inch
about 1 foot
about 1 yard

2.  about 1 inch
about 1 foot
about 1 yard

3.  about 1 inch
about 1 foot
about 1 yard

4.  about 1 inch
about 1 foot
about 1 yard

5. **Estimation** About how long is the piece of tape?



about 1 inch

about 2 inches

about 6 inches