


Name _____

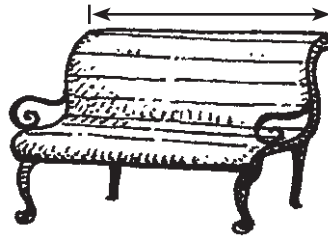
Centimeters and Meters

Circle the object that is about each length.


1. 1 centimeter



2. 1 meter



3. 1 centimeter



4. Which line is about 1 centimeter long?

- (A)
- (B)
- (C)
- (D)

5. **Algebra** How long are these 2 cubes joined together?
Write the missing numbers. Then add.



_____ + _____ = _____ centimeters