

Name \_\_\_\_\_

# **Centimeters and Meters**

This bead is about 1 centimeter long.



about 1 centimeter

There are 100 centimeters in 1 meter.

You would need 100 of these beads to make 1 meter!




About how long is each object?

Circle the answer.



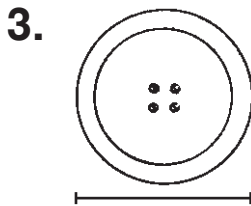
about 1 centimeter

about 1 meter




about 1 centimeter

about 1 meter



about 1 centimeter

about 1 meter



about 3 centimeters

about 3 meters