


Name _____

Measuring Length

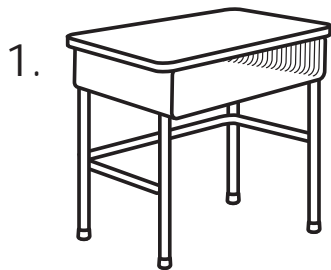
You can measure using different units.

Derrick measured the gift box in inches and in feet.


The gift box is about _____ inches long.  The gift box is about _____ foot long.

It takes more inches than feet to measure the gift box.
If you use smaller units, you need to use more.

Measure each object using different units.
Circle the unit you need more of to measure each object.



about _____ feet about _____ yards
more feet
more yards



about _____ inches about _____ feet
more inches
more feet