


Name _____

Adding and Subtracting in Measurement

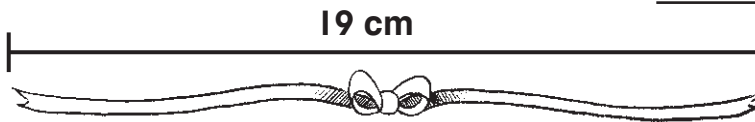
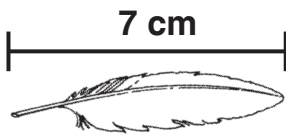
Write a number sentence to solve each problem.

1. What is the distance around the rug?



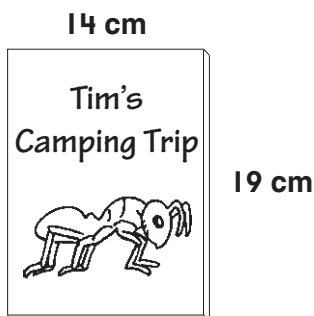
Distance around: _____ in.

2. How much shorter is the feather than the ribbon?



_____ cm shorter

3. **Algebra** Which number sentence shows the distance around the cover of the DVD case?



- (A) $14\text{ cm} + 19\text{ cm} + 14\text{ cm} = 47\text{ cm}$
- (B) $14\text{ cm} + 19\text{ cm} + 14\text{ cm} + 19\text{ cm} = 66\text{ cm}$
- (C) $19\text{ cm} + 14\text{ cm} = 33\text{ cm}$
- (D) $19\text{ cm} - 14\text{ cm} = 5\text{ cm}$