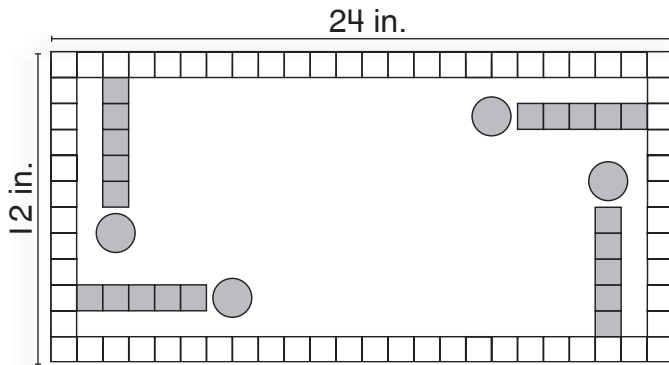


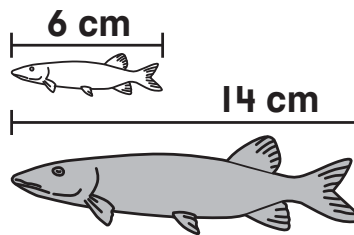
Name \_\_\_\_\_

1. What is the difference in length between the left side of the game board and the top of the game board?



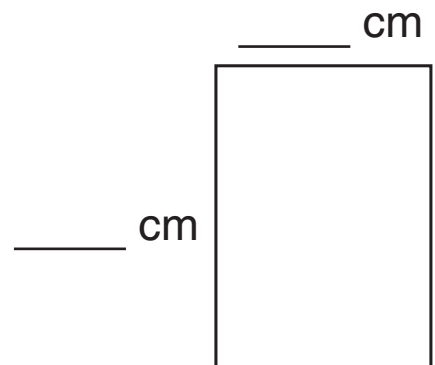
- (A) 12 in.
- (B) 36 in.
- (C) 48 in.
- (D) 60 in.

2. Shantel has two fish.  
The white fish is 6 cm long.  
The gray fish is 14 cm long.  
How much shorter is the white fish than the gray fish?



- (A) 7 cm
- (B) 8 cm
- (C) 20 cm
- (D) 40 cm

3. An ant walks around this box.  
How far does the ant walk?  
Use a centimeter ruler to measure.  
Show your work.



The ant walks \_\_\_\_\_ cm.