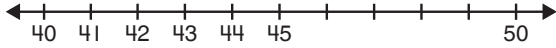



1. Which number is **not** between 45 and 50?



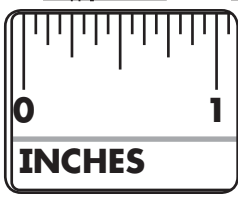
- (A) 46
- (B) 48
- (C) 49
- (D) 51

2. Which is the best estimate of the caterpillar's length?



- (A) about 5 centimeters
- (B) about 50 centimeters
- (C) about 100 centimeters
- (D) about 500 centimeters

3. About how many inches long is the doll's shoe?



- (A) 4 inches
- (B) 3 inches
- (C) 2 inches
- (D) 1 inch

4. Which numbers come next in the pattern?

70, 65, 60, _____, _____, _____

- (A) 80, 85, 90
- (B) 55, 45, 35
- (C) 55, 50, 45
- (D) 50, 40, 30