

Name \_\_\_\_\_


Practice

**13-1**

# Understanding the Hour and Minute Hands


Draw an hour hand and a minute hand to show each time.

1.




7 o'clock

2.




10 o'clock

3.




2 o'clock

4.




1 o'clock

5.



8 o'clock

6.



11 o'clock

## Algebra

7. Mark the missing time.

2 o'clock, \_\_\_\_\_, 4 o'clock

- (A) 1 o'clock
- (B) 3 o'clock
- (C) 5 o'clock
- (D) 9 o'clock

8. Mark the missing time.

4 o'clock, \_\_\_\_\_, 6 o'clock

- (A) 10 o'clock
- (B) 5 o'clock
- (C) 3 o'clock
- (D) 2 o'clock